



## MATHEMATICS- Revision worksheet

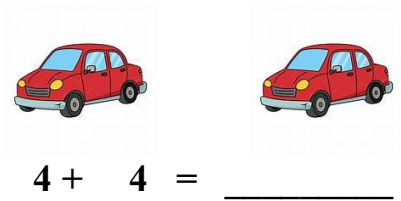
### Ch – 4 Multiplication

Name \_\_\_\_\_

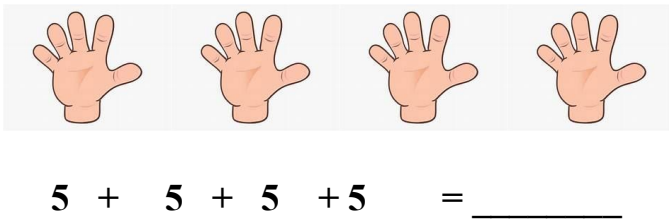
Date: \_\_\_\_\_

Class: II Sec: \_\_\_\_




1. A car has 4 wheels. How many wheels do 2 cars have?






2. A hand has 5 fingers. How many fingers do 4 hands have?








3. Fill in the blanks. Get the answer by repeated addition

a)   

\_\_\_\_\_ + \_\_\_\_\_ + \_\_\_\_\_ = \_\_\_\_\_

b)      (count the petals)

\_\_\_\_\_ + \_\_\_\_\_ + \_\_\_\_\_ + \_\_\_\_\_ + \_\_\_\_\_ = \_\_\_\_\_



# INDIAN SCHOOL NIZWA - WORKSHEET

c)  +  +  = \_\_\_\_\_

4. Count and write:



Number of groups = \_\_\_\_\_

Number of balls in a group = \_\_\_\_\_

Total number of balls = \_\_\_\_\_ x \_\_\_\_\_ = \_\_\_\_\_



Number of groups = \_\_\_\_\_

Number of shoes in a group = \_\_\_\_\_

Total number of shoes = \_\_\_\_\_ x \_\_\_\_\_ = \_\_\_\_\_

5. Fill in the blanks

a)  $2 \times 3 =$  \_\_\_\_\_

b)  $5 \times 4 =$  \_\_\_\_\_

c)  $10 \times 6 =$  \_\_\_\_\_

d)  $5 \times 9 =$  \_\_\_\_\_

e)  $5 \times 7 =$  \_\_\_\_\_

f)  $2 \times 9 =$  \_\_\_\_\_

g)  $5 \times 0 =$  \_\_\_\_\_

h)  $10 \times 8 =$  \_\_\_\_\_

i)  $2 \times 6 =$  \_\_\_\_\_

k)  $5 \times 3 =$  \_\_\_\_\_

l)  $10 \times 4 =$  \_\_\_\_\_